



Please write clearly in block capitals.

Centre number

--	--	--	--	--

Candidate number

--	--	--	--

Surname

Forename(s)

Candidate signature

I declare this is my own work.

AS MATHEMATICS

Paper 1

Thursday 16 May 2024

Afternoon

Time allowed: 1 hour 30 minutes

Materials

- You must have the AQA Formulae for A-level Mathematics booklet.
- You should have a graphical or scientific calculator that meets the requirements of the specification.

Instructions

- Use black ink or black ball-point pen. Pencil should only be used for drawing.
- Fill in the boxes at the top of this page.
- Answer **all** questions.
- You must answer each question in the space provided for that question.
- If you need extra space for your answer(s), use the lined pages at the end of this book. Write the question number against your answer(s).
- Do **not** write outside the box around each page or on blank pages.
- Show all necessary working; otherwise marks for method may be lost.
- Do all rough work in this book. Cross through any work that you do not want to be marked.

Information

- The marks for questions are shown in brackets.
- The maximum mark for this paper is 80.

Advice

- Unless stated otherwise, you may quote formulae, without proof, from the booklet.
- You do not necessarily need to use all the space provided.

For Examiner's Use	
Question	Mark
1	
2	
3	
4	
5	
6	
7	
8	
9	
10	
11	
12	
13	
14	
15	
16	
17	
18	
19	
TOTAL	



J U N 2 4 7 3 5 6 1 0 1

G/LM/Jun24/G4004/E9

7356/1

Section AAnswer **all** questions in the spaces provided.

- 1** It is given that $\tan \theta^\circ = k$, where k is a constant.

Find $\tan (\theta + 180)^\circ$

Circle your answer.

[1 mark]

$-k$

$-\frac{1}{k}$

$\frac{1}{k}$

k

- 2** Curve C has equation $y = \frac{1}{(x-1)^2}$

State the equations of the asymptotes to curve C

Tick (✓) **one** box.**[1 mark]** $x = 0$ and $y = 0$ ☐ $x = 0$ and $y = 1$ ☐ $x = 1$ and $y = 0$ ☐ $x = 1$ and $y = 1$ ☐

4 (a) (i) By using a suitable trigonometric identity, show that the equation

$$\sin \theta \tan \theta = 4 \cos \theta$$

can be written as

$$\tan^2 \theta = 4$$

[1 mark]

4 (a) (ii) Hence solve the equation

$$\sin \theta \tan \theta = 4 \cos \theta$$

where $0^\circ < \theta < 360^\circ$

Give your answers to the nearest degree.

[3 marks]



4 (b) Deduce all solutions of the equation

$$\sin 3\alpha \tan 3\alpha = 4 \cos 3\alpha$$

where $0^\circ < \alpha < 180^\circ$

Give your answers to the nearest degree.

[3 marks]

Turn over for the next question

Turn over ►



- 5** A student is looking for factors of the polynomial $f(x)$
- They suggest that $(x - 2)$ is a factor of $f(x)$
- The method they use to check this suggestion is to calculate $f(-2)$
- They correctly calculate that $f(-2) = 0$
- They conclude that their suggestion is correct.

5 (a) Make **one** comment about the student's **method**.

[1 mark]

5 (b) Make **two** comments about the student's **conclusion**.

[2 marks]

1

2



- 6 Determine the set of values of x which satisfy the inequality

$$3x^2 + 3x > x + 6$$

Give your answer in exact form using set notation.

[4 marks]

Turn over for the next question

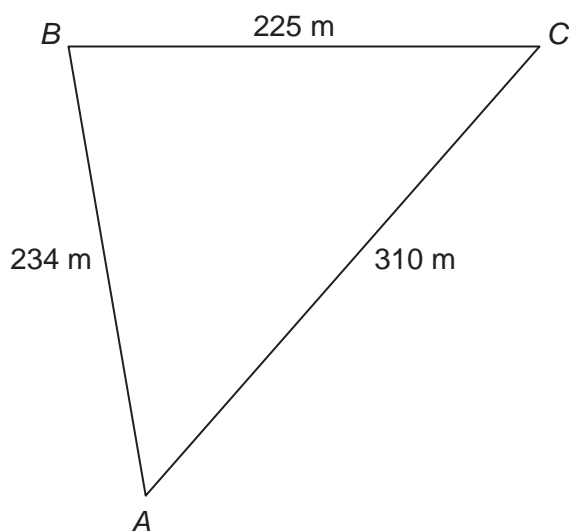
Turn over ►



- 7** A triangular field of grass, ABC , has boundaries with lengths as follows:

$$AB = 234 \text{ m} \quad BC = 225 \text{ m} \quad AC = 310 \text{ m}$$

The field is shown in the diagram below.



- 7 (a)** Find angle A

[2 marks]



- 7 (b)** Farmers calculate the number of sheep they can keep in a field, by allowing one sheep for every 1200 m^2 of grass.

Find the maximum number of sheep which can be kept in the field *ABC*

[3 marks]

Turn over for the next question

Turn over ►



8 It is given that

$$\ln x - \ln y = 3$$

8 (a) Express x in terms of y in a form not involving logarithms.

[3 marks]

8 (b) Given also that

$$x + y = 10$$

find the exact value of y and the exact value of x

[3 marks]



9 A curve has equation $y = f(x)$ where

$$f(x) = x(6 - x)$$

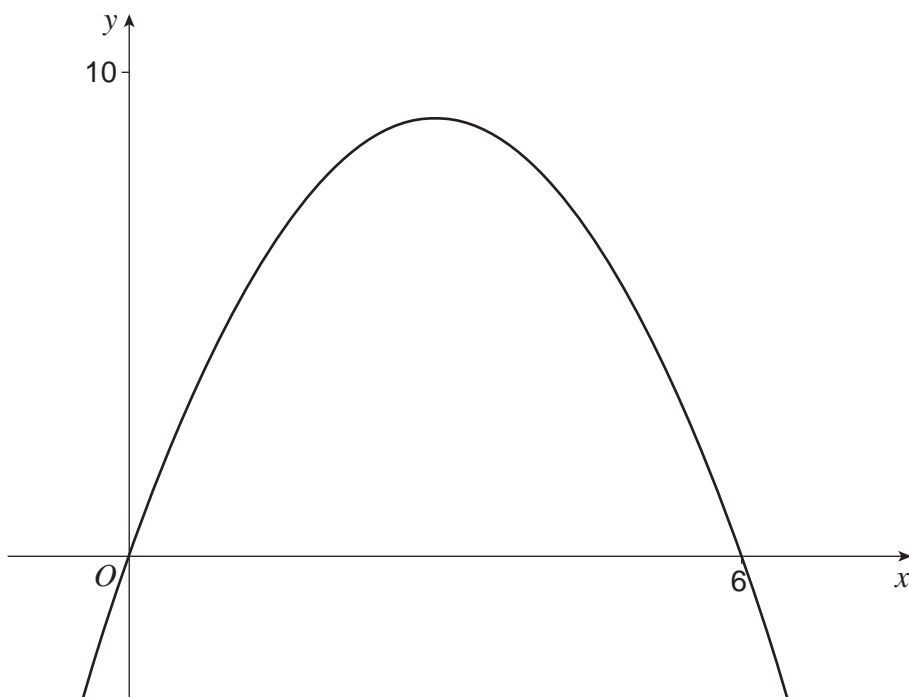
9 (a) Find $f'(x)$

[2 marks]

9 (b) The diagram below shows the graph of $y = f(x)$

On the same diagram sketch the gradient function for this curve, stating the coordinates of any points where the gradient function cuts the axes.

[3 marks]



Turn over ►



11 It is given that for the continuous function g

- $g'(1) = 0$
- $g'(4) = 0$
- $g''(x) = 2x - 5$

11 (a) Determine the nature of each of the turning points of g

Fully justify your answer.

[3 marks]

11 (b) Find the set of values of x for which g is an increasing function.

[2 marks]

Turn over ►



- 12** The monthly mean temperature of a city, T degrees Celsius, may be modelled by the equation

$$T = 15 + 8 \sin(30m - 120)^\circ$$

where m is the month number, counting January = 1, February = 2, through to December = 12

- 12 (a)** Using this model, calculate the monthly mean temperature of the city for May, the fifth month.

[2 marks]

- 12 (b)** Using this model, find the month with the highest mean temperature.

[2 marks]

- 12 (c)** Climate change may affect the parameters, 8, 30, 120 and 15, used in this model.

- 12 (c) (i)** State, with a reason, which parameter would be increased because of an overall rise in temperatures.

[1 mark]



- 12 (c) (ii)** State, with a reason, which parameter would be increased because of the occurrence of more extreme temperatures.

[1 mark]

END OF SECTION A

Turn over for Section B

Turn over ►



Section B

Answer **all** questions in the spaces provided.

13

A particle is moving in a straight line with constant acceleration $a \text{ m s}^{-2}$

The particle's velocity, $v \text{ m s}^{-1}$, varies with time, t seconds, so that

$$v = 3 - 4t$$

Deduce the value of a

Circle your answer.

[1 mark]

–4

–1

3

4



14

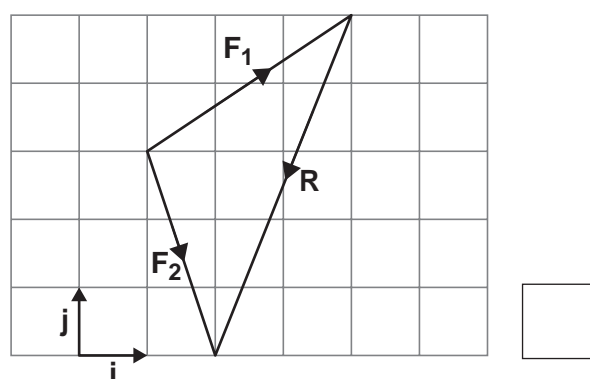
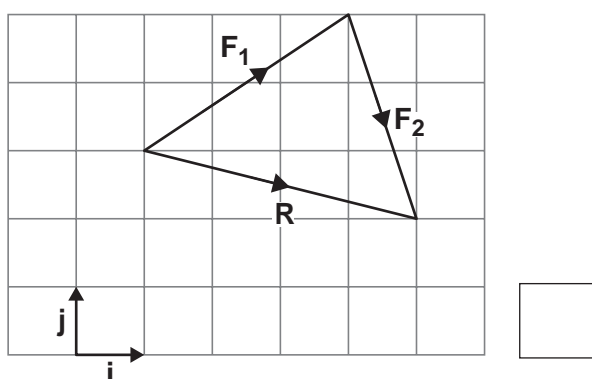
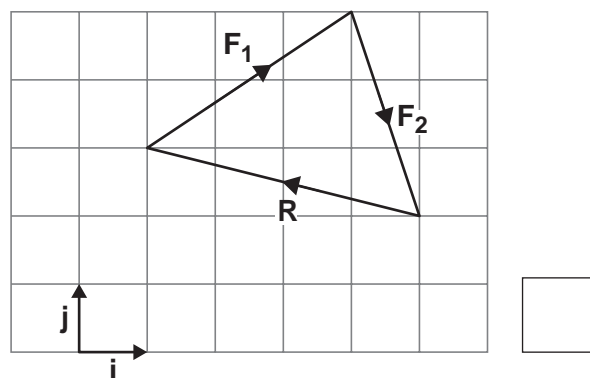
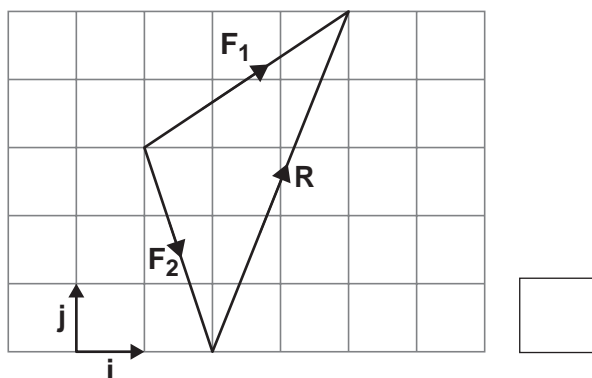
Two forces, $\mathbf{F}_1 = 3\mathbf{i} + 2\mathbf{j}$ newtons and $\mathbf{F}_2 = \mathbf{i} - 3\mathbf{j}$ newtons, are added together to find a resultant force, \mathbf{R} newtons.

This vector addition can be represented using a diagram.

Identify the diagram below which correctly represents this vector addition.

Tick (✓) **one** box.

[1 mark]

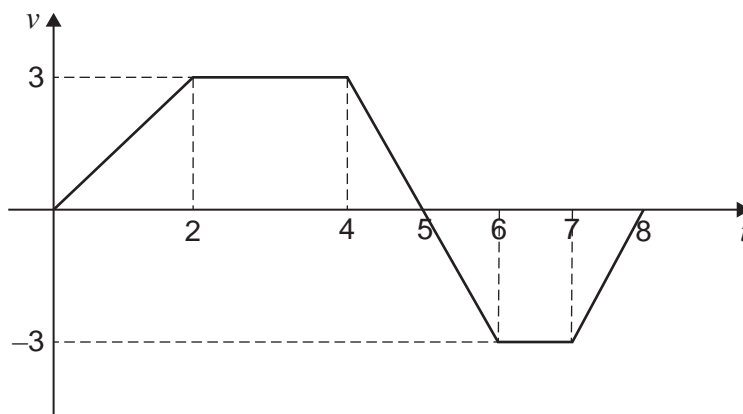


Turn over for the next question

Turn over ►



- 15** A graph indicating how the velocity, $v \text{ m s}^{-1}$, of a particle changes with respect to time, t seconds, is shown below.



- 15 (a)** Find the total distance travelled by the particle over the 8 second period shown.

[3 marks]



15 (b) A student claims that

“The displacement of the particle is less than the distance travelled.”

State the range of values of t for which this claim is true.

[1 mark]

Turn over for the next question

Turn over ►



16

In this question use $g = 9.8 \text{ m s}^{-2}$

A ball is launched vertically upwards from the Earth's surface with velocity $u \text{ m s}^{-1}$

The ball reaches a maximum height of 15 metres.

You may assume that air resistance can be ignored.

Find the value of u

[3 marks]



- 17** A particle moves in a straight line with acceleration $a \text{ m s}^{-2}$, at time t seconds, where

$$a = 10 - 6t$$

The particle's velocity, $v \text{ m s}^{-1}$, and displacement, r metres, are both initially zero.

Show that

$$r = t^2(5 - t)$$

Fully justify your answer.

[4 marks]

Turn over for the next question

Turn over ►



- 18** It is given that two points A and B have position vectors

$$\overrightarrow{OA} = \begin{bmatrix} 5 \\ -1 \end{bmatrix} \text{ metres} \quad \text{and} \quad \overrightarrow{OB} = \begin{bmatrix} 13 \\ 5 \end{bmatrix} \text{ metres.}$$

- 18 (a)** Show that the distance from A to B is 10 metres.

[3 marks]



18 (b) A constant resultant force, of magnitude R newtons, acts on a particle so that it moves in a straight line passing through the same two points A and B

At A , the speed of the particle is 3 m s^{-1} in the direction from A to B

The particle takes 2 seconds to travel from A to B

The mass of the particle is 150 grams.

Find the value of R

[3 marks]

Turn over for the next question

Turn over ►



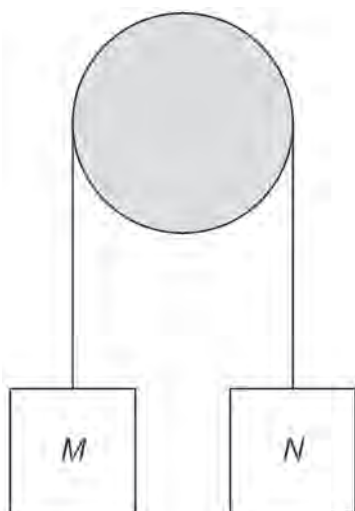
19

Two objects, M and N , are connected by a light inextensible string that passes over a smooth peg.

M has a mass of 0.6 kilograms.

N has a mass of 0.5 kilograms.

M and N are initially held at rest, with the string taut, as shown in the diagram below.



M and N are released at the same instant and begin to move vertically.

You may assume that air resistance can be ignored.

19 (a)

It is given that M and N move with acceleration $a \text{ m s}^{-2}$

By forming two equations of motion show that

$$a = \frac{1}{11}g$$

[5 marks]



- 19 (b)** The speed of N , 0.5 seconds after its release, is $\frac{g}{k} \text{ m s}^{-1}$ where k is a constant.

Find the value of k

[2 marks]

- 19 (c)** State **one** assumption that must be made for the answer in part **(b)** to be valid.

[1 mark]

END OF QUESTIONS



There are no questions printed on this page

*Do not write
outside the
box*

**DO NOT WRITE ON THIS PAGE
ANSWER IN THE SPACES PROVIDED**



